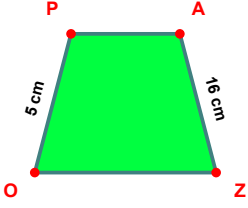
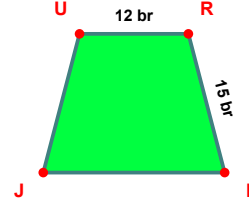


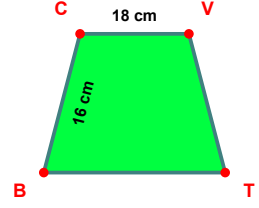
**SORU:** Aşağıdaki şekillerde verilen, kenar uzunlukları farklarını bulunuz.



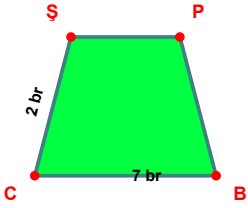
$$|AZ| - |PO| = \dots\dots\dots$$



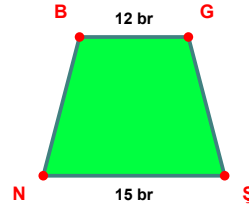
$$|RI| - |UR| = \dots\dots\dots$$



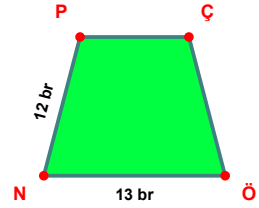
$$|CV| - |BC| = \dots\dots\dots$$



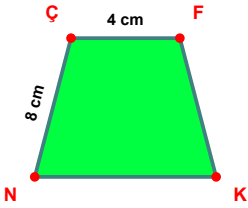
$$|BC| - |CS| = \dots\dots\dots$$



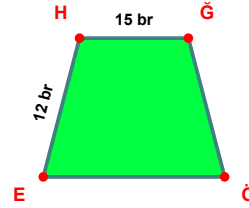
$$|ŞN| - |BG| = \dots\dots\dots$$



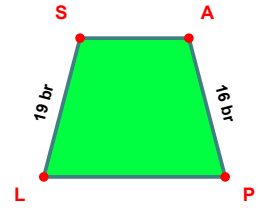
$$|ÖN| - |NP| = \dots\dots\dots$$



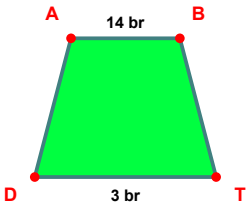
$$|NK| - |ÇF| = \dots\dots\dots$$



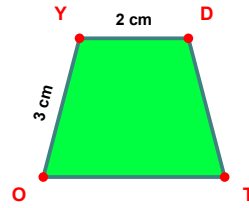
$$|HG| - |EH| = \dots\dots\dots$$



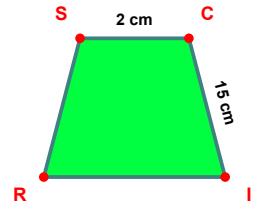
$$|LS| - |AP| = \dots\dots\dots$$



$$|AB| - |TD| = \dots\dots\dots$$

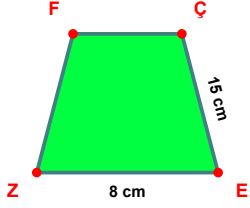


$$|OY| - |YD| = \dots\dots\dots$$

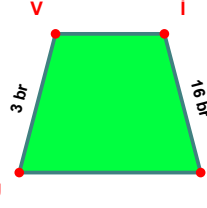


$$|CI| - |SC| = \dots\dots\dots$$

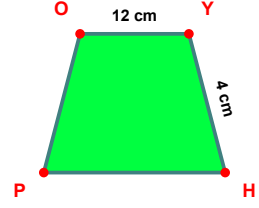
**SORU:** Aşağıdaki şekillerde verilen, kenar uzunlukları farklarını bulunuz.



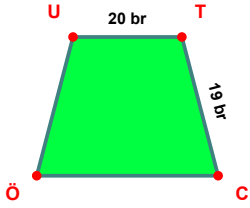
$$|ÇE| - |EZ| = \dots\dots\dots$$



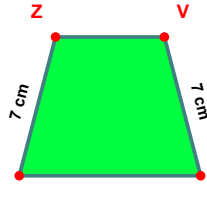
$$|İK| - |UV| = \dots\dots\dots$$



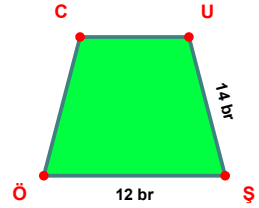
$$|OY| - |YH| = \dots\dots\dots$$



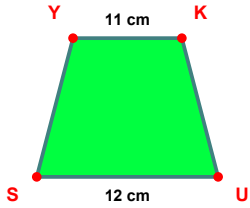
$$|UT| - |TC| = \dots\dots\dots$$



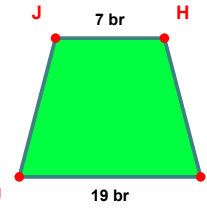
$$|İZ| - |VK| = \dots\dots\dots$$



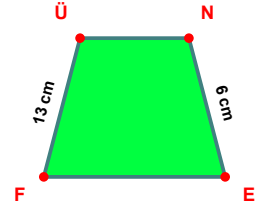
$$|ÜŞ| - |ŞÖ| = \dots\dots\dots$$



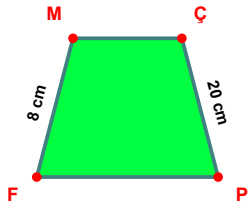
$$|US| - |YK| = \dots\dots\dots$$



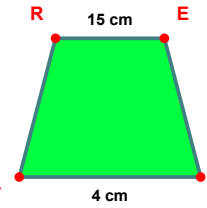
$$|IU| - |JH| = \dots\dots\dots$$



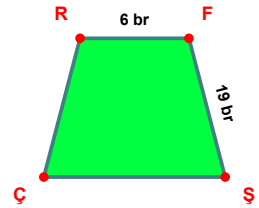
$$|FÜ| - |NE| = \dots\dots\dots$$



$$|ÇP| - |FM| = \dots\dots\dots$$



$$|RE| - |DY| = \dots\dots\dots$$



$$|FŞ| - |RF| = \dots\dots\dots$$

SÜREÇ ODAKLI DEĞERLENDİRME ÖLÇEĞİ

Doğru Sayısı: ..... / 24

Öğretmen ilgili kutucuğu işaretler.

Geliştirilmeli (0-8)

İyi (9-14)

Çok İyi (15-20)

Mükemmel (21-24)

☐☐☐☐

Hazırlayan: .....

Bu bölüme sınıfınızın ilgili kazanıma yönelik genel durumuna ilişkin gözlem ve izlenimlerinizi, öğrencilerinizin bu kazanımla ilgili öğrenme eksikliklerini ve bu eksikliklerin giderilmesi amacıyla yaptığınız/yapmayı planladığınız faaliyetleri not edebilirsiniz.

No	Adı - Soyadı	Toplam Puan	Değerlendirme
1			
2			
3			
4			
5			
6			
7			
8			
9			
10			
11			
12			
13			
14			
15			
16			
17			
18			
19			
20			
21			
22			
23			
24			
25			
26			
27			
28			
29			
30			
31			
32			
33			
34			
35			

Hazırlayan: .....